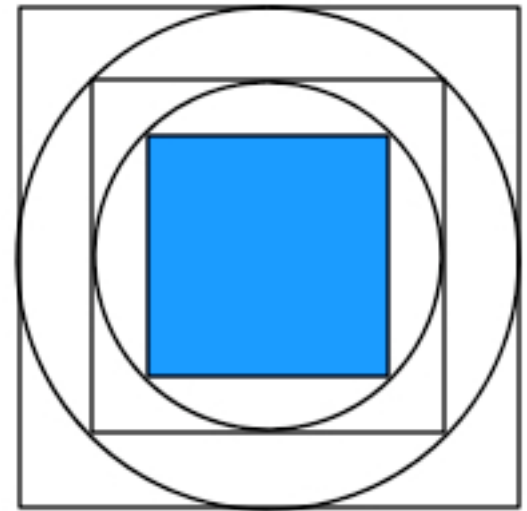
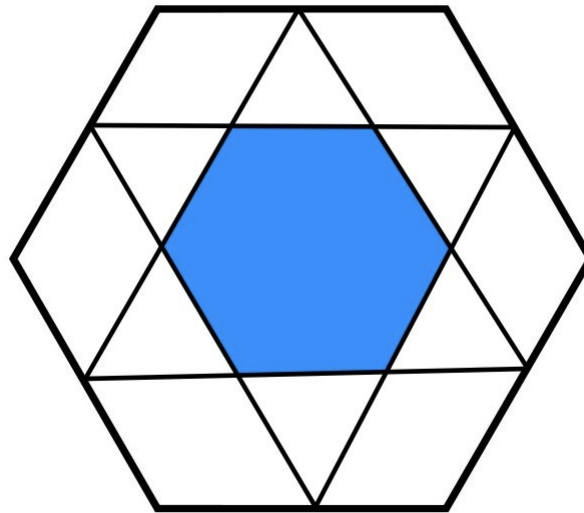
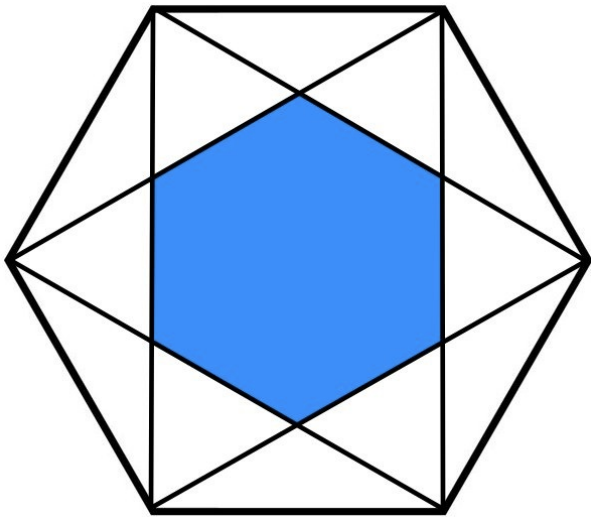


Wordless Geometry

For every image, the question is the same: **what fraction of the shape is shaded?**

Each problem can be solved without numbers or words: just geometric observations.

You can assume that drawings are to scale, and that points that look like midpoints are midpoints, shapes that look like circles are circles, squares are squares, polygons are regular, etc.



What fraction of each shape is shaded?

Created by



math 4 love

Copyright 2017 Math for Love

Thanks to Alex Bogolmolny and Josh Zucker for inspirations on some of these problems

Distributed by



Gathering 4 Gardner.

PRESENTS

Celebration of Mind

For more activities, visit: www.CelebrationOfMind.org

